

## ENGLISH

[:NQ]

[:Q.1] **[Choose the correct preposition]**

I have got a meeting .....Monday morning.

[:A] on

[:B] by

[:C] in

[:D] of

[:ANS] A

[:INFO] mp=1,mn=0,type=MCQ

[:NQ]

[:Q.2] He enjoyed the peace as he walked.....the forest.

[:A] on

[:B] by

[:C] through

[:D] of

[:ANS] C

[:NQ]

[:Q.3] A grey mist hung .....the field.

[:A] over

[:B] by

[:C] in

[:D] on

[:ANS] A

[:NQ]

[:Q.4] I will be with you .....a movement.

[:A] of

[:B] in

[:C] to

[:D] by

[:ANS] B

[:NQ]

[:Q.5] The child responded to his mother 's demands .....throwing a tantrum.

[:A] on

[:B] in

[:C] by

[:D] of

[:ANS] C

[:NQ]

[:Q.6] **[Change the following sentence in passive voice]**

They will rebuild the entire block.

[:A] The entire block will be rebuilt .

[:B] The entire block is being built.

[:C] The block may be built

[:D] None of these.

[ANS] A

[NQ]

[Q.7] The teacher -----the student for theft.

[A] punished

[B] has been punished

[C] is punished

[D] was punished

[ANS] A

[NQ]

[Q.8] He took that watch

[A] That watch is take.

[B] That watch was taken by him.

[C] That watch took by him.

[D] That watch had taken.

[ANS] B

[NQ]

[Q.9] Change the following sentence in indirect speech

He said," Let us wait for your teacher."

[A] He proposed that they shall wait for their teacher.

[B] He proposed that they will wait for their teacher.

[C] He proposed that they would wait for their teacher.

[D] He proposed that they should wait for their teacher.

[ANS] D

[NQ]

[Q.10] She said to me,"Start".

[A] She asked me to start.

[B] She requested me to start.

[C] She advised me to start.

[D] None of these.

[ANS] A

[NQ]

[Q.11] He said to her, " What a cold day!"

[A] He said her that it is a cold day

[B] He told her it was a cold day

[C] He exclaimed that it was a very cold day

[D] None of these.

[ANS] C

[NQ]

[Q.12] Synonym of 'differ'.

[A] Indifferent

[B] Postpone

[C] Defy

[D] None of these

[ANS] B

[ :NQ]

[ :Q.13] Synonym of 'cease'.

[ :A] Begin

[ :B] Stop

[ :C] Credible

[ :D] None of these

[ :ANS] B

[ :NQ]

[ :Q.14] Antonym of 'foremost'

[ :A] Unimportant

[ :B] Hindmost

[ :C] Disposed

[ :D] None of these

[ :ANS] A

[ :NQ]

[ :Q.15] Antonym of 'protest

[ :A] Deprives

[ :B] Deserts

[ :C] Defends

[ :D] None of these

[ :ANS] B

[ :END]

[ :NQ]

[ :Q.1] Which expression has a value greater than the value of  $-40/(-8)$  ?

[ :A]  $30/(-5)$

[ :B]  $-80/8$

[ :C]  $-35/(-7)$

[ :D]  $-54/(-9)$

[ :ANS] D

[ :INFO] mp=1,mn=0,type=MCQ

[ :NQ]

[ :Q.2]  $-69*(103)$  is not the same as

[ :A]  $-69*(100+3)$

[ :B]  $(-69)*100+(-69)*3$

[ :C]  $-69*3+100$

[ :D]  $(-60-9)*103$

[ :ANS] C

[ :NQ]

[ :Q.3] 4.036 divided by 0.04 gives

[ :A] 1.009

[ :B] 10.09

[ :C] 100.9

[ :D] None of these

[ :ANS] C

[ :NQ]

[ :Q.4] If  $367*19 = 6973$  then  $1.9*36.7$  is equal to

[ :A] 0.6973

[ :B] 6.973

[ :C] 69.73

[ :D] 697.3

[ :ANS] C

[ :NQ]

[ :Q.5]  $22/7$  is equal to

[ :A] 3.14

[ :B] 3.142

[ :C] 3.1428

[ :D]  $\sqrt[3]{142857}$

[ :ANS] D

[ :NQ]

[ :Q.6]  $3/4 - (-4)/5$  is not equal to

[ :A]  $31/20$

[ :B]  $-(-4/5) + (3/4)$

[ :C]  $(-4/5) - (3/4)$

[ :D]  $(-3/-4) + (4/5)$

[ :ANS] C

[ :NQ]

[Q.7] The solution of the equation  $ax + b = 0$  is

[A]  $a/b$

[B]  $-b$

[C]  $-b/a$

[D]  $b/a$

[ANS] C

[NQ]

[Q.8] If  $P+3=10$  then the value of  $6P-42$  is

[A] 30

[B] 7

[C] 18

[D] 0

[ANS] D

[NQ]

[Q.9]  $(4)^3 : (2)^5$  is the same as

[A] 4:1

[B] 3:5

[C] 12:10

[D] 2:1

[ANS] D

[NQ]

[Q.10] Which of the following represents  $ab=64$ ?

[A]  $8:a = 8:b$

[B]  $a:16 = b:4$

[C]  $a:8 = b:8$

[D]  $32:a = b:2$

[ANS] D

[NQ]

[Q.11] What is 5% of 50% of 500?

[A] 12.5

[B] 25

[C] 1.25

[D] 6.25

[ANS] A

[NQ]

[Q.12] The area of a circle of radius 5 units is numerically what percent of its circumference?

[A] 200

[B] 225

[C] 240

[D] 250

[ANS] D

[NQ]

[Q.13] The area of an equilateral triangle is  $4\sqrt{3} \text{ cm}^2$ , Its perimeter is

[A] 12 cm

[B] 6 cm

[ :C] 8 cm  
[ :D]  $\sqrt{3\sqrt{3}}$  cm  
[ :ANS] A

[ :NQ]  
[ :Q.14] The median of 0, 5, 6, -2, 7, 3, -4 is  
[ :A] 5  
[ :B] -4  
[ :C] 3  
[ :D] 2  
[ :ANS] C

[ :NQ]  
[ :Q.15] The range of the data 20,18,25,16,4,19,10,9 is  
[ :A] 22  
[ :B] 21  
[ :C] 19  
[ :D] 16  
[ :ANS] B

[ :END]

[ :NQ]

[ :Q.1] Instruction : In each of the Questions Nos. 1 to 5 a number series is given with one term missing shown by questions mark(?). This term is one of the four alternatives given under it. Find the correct alternative.

2, 3, 5, 8, 13, ?, 34

[ :A] 23

[ :B] 21

[ :C] 20

[ :D] 22

[ :ANS] B

[ :INFO] mp=1,mn=0,type=MCQ

[ :NQ]

[ :Q.2] 3, 8, 15, 24, 35, ?

[ :A] 52

[ :B] 50

[ :C] 48

[ :D] 46

[ :ANS] C

[ :NQ]

[ :Q.3] 8, 24, 28, 140, 146, 1022, 1030, ?

[ :A] 1040

[ :B] 8240

[ :C] 10300

[ :D] 9270

[ :ANS] D

[ :NQ]

[ :Q.4] 3, 3, 4.5, 9, 22.5, ?

[ :A] 27.3

[ :B] 48

[ :C] 55

[ :D] 67.5

[ :ANS] D

[ :NQ]

[ :Q.5] 2, 3, 7, 16, 32, ?

[ :A] 57

[ :B] 39

[ :C] 56

[ :D] 55

[ :ANS] A

[ :NQ]

[ :Q.6] In this Question three alternatives are alike in a certain way but the rest one is different. Select the odd one.

[ :A] Chalk

[ :B] Pen

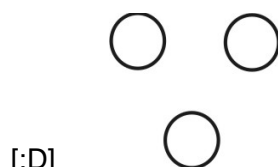
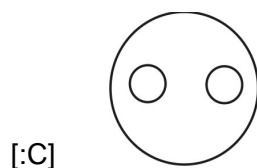
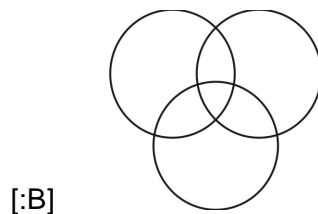
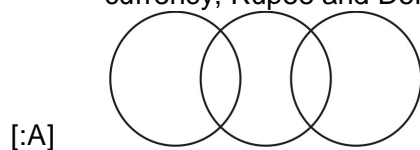
[ :C] Pencil

[ :D] Map  
[ :ANS] D

[ :NQ]  
[ :Q.7] In this Question three alternatives are alike in a certain way but the rest one is different.  
Select the odd one.  
[ :A] Taxi  
[ :B] Bus  
[ :C] Car  
[ :D] Tanker  
[ :ANS] D

[ :NQ]  
[ :Q.8] In this Question three alternatives are alike in a certain way but the rest one is different.  
Select the odd one.  
[ :A] June  
[ :B] August  
[ :C] April  
[ :D] November  
[ :ANS] B

[ :NQ]  
[ :Q.9] Which one of the following Venn-diagram correctly represents the relation between currency, Rupee and Dollar?

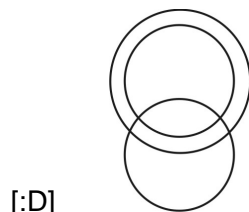
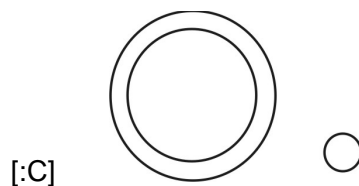
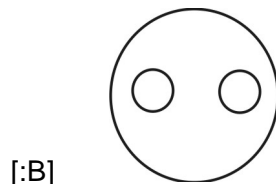
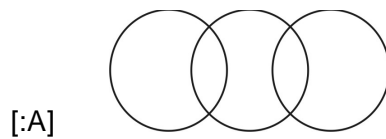


[ :ANS] C

[ :NQ]



[Q.10] Which one of the following Venn-diagram represents the relations between Mumbai, Madhya Pradesh and Bhopal?



[D]  
[ANS] C

[NQ]

[Q.11] In a coded language, ONLINE is written as LNOENI and SILENT is written as LISTEN, then in the same coded language, LISTEN will be written as.

- [A] ILSNET
- [B] SILENT
- [C] SILNET
- [D] SILETN

[ANS] C

[NQ]

[Q.12] If AVOID is coded as 73564 and CHINA is coded as 28617, what will be the code for COVID?

- [A] 53246
- [B] 25364
- [C] 25346
- [D] 25634

[ANS] B

[NQ]

[Q.13] Arrange the following in meaningful sequence :

- (1) Crop                      (2) Root                      (3) Stem                      (4) Seed                      (5) Flowers

[A] 4, 1, 2, 3, 5

[B] 2, 4, 3, 5, 1  
[C] 2, 3, 4, 5, 1  
[D] 4, 2, 3, 5, 1  
[ANS] D

[NQ]

[Q.14] Arrange the following in meaningful sequence :

(1) Rain (2) Cloud (3) Ocean (4) River (5) Monsoon

[A] 5, 2, 1, 4, 3  
[B] 3, 1, 2, 4, 5  
[C] 1, 5, 2, 4, 5  
[D] 2, 5, 1, 4, 3  
[ANS] A

[NQ]

[Q.15] As bird is related to kite, in the same way fish is related to which of the following.

[A] Crow  
[B] Submarine  
[C] Boy  
[D] Thread  
[ANS] B

[END]

[ :NQ]

[ :Q.1] Which is the largest ocean in the world?

[ :A] Indian Ocean

[ :B] Pacific Ocean

[ :C] Arctic Ocean

[ :D] Atlantic Ocean

[ :ANS] B

[ :INFO] mp=1,mn=0,type=MCQ

[ :NQ]

[ :Q.2] Which is India's first super computer?

[ :A] Param8000

[ :B] param80000

[ :C] param800

[ :D] param8

[ :ANS] A

[ :NQ]

[ :Q.3] Which is largest island in the world?

[ :A] New Guinea

[ :B] Andaman Nicobar

[ :C] Greenland

[ :D] Hawaii

[ :ANS] C

[ :NQ]

[ :Q.4] Which is the 29th state of India?

[ :A] Uttarakhand

[ :B] Telangana

[ :C] Uttar Pradesh

[ :D] Madhya Pradesh

[ :ANS] B

[ :NQ]

[ :Q.5] Which state has the longest coastal line in India?

[ :A] Gujarat

[ :B] Kerala

[ :C] Karnataka

[ :D] West Bengal

[ :ANS] A

[ :NQ]

[ :Q.6] Which continent is known as Dark Continent?

[ :A] Asia

[ :B] South America

[ :C] Australia

[ :D] Africa

[ :ANS] D

[ :NQ]

[Q.7] On which river the Uri dam is constructed?

[A] Beas

[B] Jhalam

[C] Sutlej

[D] Ganga

[ANS] B

[NQ]

[Q.8] Which is the smallest country in the world?

[A] Vatican City

[B] Bhutan

[C] Nepal

[D] Shri Lanka

[ANS] A

[NQ]

[Q.9] Who was India's first Deputy Prime Minister?

[A] Morarji Desai

[B] Vallabhbhai Patel

[C] Devi Lal

[D] Charan Singh

[ANS] B

[NQ]

[Q.10] Which is smallest continent in the world?

[A] Asia

[B] Australia

[C] Arctic

[D] Africa

[ANS] B

[NQ]

[Q.11] Who was the inventor of electricity?

[A] Benjamin

[B] Benjamin Franklin

[C] Leonardo da Vinci

[D] Vikings

[ANS] B

[NQ]

[Q.12] Which metal is the lightest metal in world?

[A] Zinc

[B] Lithium

[C] Platinum

[D] Gold

[ANS] B

[NQ]

[Q.13] Computer is connected to Internet by which device?

[A] Modem

[B] Mouse

[C] CPU  
[D] RAM  
[ANS] A

[NQ]  
[Q.14] General Election in India holds after how many years?  
[A] 2  
[B] 10  
[C] 6  
[D] 5  
[ANS] D

[NQ]  
[Q.15] What is the capital of United States of America?  
[A] New York  
[B] Washington, D.C.  
[C] Los Angeles  
[D] Philadelphia  
[ANS] B

[END]