

## ENGLISH

[:NQ]

[:Q.1] Antonym of 'military'

[:A] Civil

[:B] Militant

[:C] Coup

[:D] None of these

[:ANS] A

[:INFO] mp=1,mn=0,type=MCQ

[:NQ]

[:Q.2] Antonym of 'embrace'

[:A] Disobey

[:B] Reject

[:C] Obscure

[:D] None of these

[:ANS] B

[:NQ]

[:Q.3] Synonym of beauty

[:A] Wonderful

[:B] Ugly

[:C] Bad

[:D] None of these

[:ANS] A

[:NQ]

[:Q.4] Synonym of 'fostering'

[:A] safe guarding

[:B] nurturing

[:C] neglecting

[:D] none of these

[:ANS] B

[:NQ]

[:Q.5] Change the following sentence in indirect speech

I said him, "Why are you working so hard?"

[:A] I asked him why he was working so hard.

[:B] I asked him why was he working so hard.

[:C] I asked him why he had been working so hard

[:D] none of these

[:ANS] B

[:NQ]

[:Q.6] He said to her, "What a cold day!"

[:A] He said to her it was cold day

[:B] He exclaimed that it was very cold day

[:C] He said that it was a cold day

[:D] None of these

[:ANS] A

[ :NQ]

[ :Q.7] kiran asked me,"did you see the match last night?"

[ :A] kiran asked me whether I had seen the match in earlier night

[ :B] kiran asked me whether i saw the match following night

[ :C] kiran asked me if i see the match last night

[ :D] None of these

[ :ANS] B

[ :NQ]

[ :Q.8] Change the following sentence in passive voice

We must listen to the elders

[ :A] The elders deserve listening

[ :B] listen to the elders

[ :C] The elder must be listened to

[ :D] none of these

[ :ANS] C

[ :NQ]

[ :Q.9] Bring a glass of water

[ :A] You are requested to bring a glass of water

[ :B] you are ordered to bring a glass of water

[ :C] you are advised to bring a glass pf water

[ :D] None of these

[ :ANS] B

[ :NQ]

[ :Q.10] The teacher \_\_\_\_\_the students for the theft

[ :A] Has been punished

[ :B] punished

[ :C] Is punished

[ :D] none of these

[ :ANS] B

[ :NQ]

[ :Q.11] Choose the correct preposition

Nafeesa is afraid\_\_\_\_\_spiders

[ :A] from

[ :B] in

[ :C] about

[ :D] of

[ :ANS] D

[ :NQ]

[ :Q.12] I worried\_\_\_\_\_the exam

[ :A] in

[ :B] about

[ :C] on

[ :D] of

[ :ANS] B

[ :NQ]

[Q.13] I am envious\_\_\_\_\_them

[A] of

[B] about

[C] in

[D] on

[ANS] A

[NQ]

[Q.14] He confided\_\_\_\_\_me

[A] about

[B] in

[C] on

[D] of

[ANS] B

[NQ]

[Q.15] she suffers\_\_\_\_\_a heart disease

[A] about

[B] in

[C] from

[D] on

[ANS] C

[END]

[ :NQ]

[ :Q.1] Which of the following is the number non-perfect square numbers between the square of the numbers  $n$  and  $n+1$ ?

[ :A]  $n+1$

[ :B]  $n$

[ :C]  $2n$

[ :D]  $2n+1$

[ :ANS] C

[ :INFO] mp=1,mn=0,type=MCQ

[ :NQ]

[ :Q.2] Which of the following statement is true?

[ :A] Natural numbers are closed under multiplication

[ :B] Whole numbers are not closed under multiplication

[ :C] Integers are not closed under multiplication

[ :D] Rational numbers are not closed under multiplication

[ :ANS] A

[ :NQ]

[ :Q.3] The degree of the equation  $x^2 - 2x + 1 = x^2 - 3$  is

[ :A] 1

[ :B] 2

[ :C] 0

[ :D] 3

[ :ANS] A

[ :NQ]

[ :Q.4] If 9 is added to a number, it becomes 25. This statement in the form of an equation is

[ :A]  $x+9 = 25$

[ :B]  $x-9 = 25$

[ :C]  $9x = 25$

[ :D]  $x/9 = 25$

[ :ANS] A

[ :NQ]

[ :Q.5] The angle sum of a convex polygon with number of sides 8 is

[ :A]  $720^\circ$

[ :B]  $900^\circ$

[ :C]  $1080^\circ$

[ :D]  $1440^\circ$

[ :ANS] C

[ :NQ]

[ :Q.6] The cube of an even natural number is

[ :A] even

[ :B] odd

[ :C] may be even, may be odd

[ :D] Prime number

[ :ANS] A

[ :NQ]

[ :Q.7] The value of  $x^2 - 2yx + y^2$  when  $x=1, y=2$  is

- [ :A] 1
- [ :B] -1
- [ :C] 2
- [ :D] -2

[ :ANS] A

[ :NQ]

[ :Q.8] The area of a circle of radius  $r$  is

- [ :A]  $\frac{1}{2}\pi r^2$
- [ :B]  $r^2$
- [ :C]  $\pi r^2$
- [ :D]  $\frac{1}{4}\pi r^2$

[ :ANS] A

[ :NQ]

[ :Q.9]  $1 \text{ m}^3 = ?$

- [ :A]  $1000000 \text{ cm}^3$
- [ :B]  $100 \text{ cm}^3$
- [ :C]  $10 \text{ cm}^3$
- [ :D]  $1/1000 \text{ cm}^3$

[ :ANS] A

[ :NQ]

[ :Q.10] How many vertices does a triangular pyramid have?

- [ :A] 1
- [ :B] 2
- [ :C] 3
- [ :D] 4

[ :ANS] D

[ :NQ]

[ :Q.11]  $1 \text{ mm}^3 = ?$

- [ :A]  $0.001 \text{ cm}^3$
- [ :B]  $0.01 \text{ cm}^3$
- [ :C]  $0.1 \text{ cm}^3$
- [ :D]  $1000 \text{ cm}^3$

[ :ANS] A

[ :NQ]

[ :Q.12] A horse eats 18 kg of com in 12 days? How much does he eat is 9 days?

- [ :A] 11.5 Kg
- [ :B] 12.5 Kg
- [ :C] 13.5 kg
- [ :D] 14.5 kg

[ :ANS] C

[ :NQ]

[ :Q.13] 8 g of sandal wood cost Rs 40. what will 10 g cost?

- [ :A] Rs 30

[B] Rs 36

[C] Rs 48

[D] Rs 50

[ANS] D

[NQ]

[Q.14] The common factor of 12 y and 30 is

[A] 6

[B] 12

[C] 30

[D] 6y

[ANS] A

[NQ]

[Q.15] The number  $3 \times 100 + 4 \times 10 + 5$  in usual form is---

[A] 453

[B] 435

[C] 354

[D] 345

[ANS] D

[END]

[ :NQ]

[ :Q.1] Instruction : In each of the Questions Nos. 1 to 5 a number series is given with one term missing shown by questions mark(?). This term is one of the four alternatives given under it. Find the correct alternative.

2, 3, 5, 8, 13, ?, 34

[ :A] 23

[ :B] 21

[ :C] 20

[ :D] 22

[ :ANS] B

[ :INFO] mp=1,mn=0,type=MCQ

[ :NQ]

[ :Q.2] 3, 8, 15, 24, 35, ?

[ :A] 52

[ :B] 50

[ :C] 48

[ :D] 46

[ :ANS] C

[ :NQ]

[ :Q.3] 8, 24, 28, 140, 146, 1022, 1030, ?

[ :A] 1040

[ :B] 8240

[ :C] 10300

[ :D] 9270

[ :ANS] D

[ :NQ]

[ :Q.4] 3, 3, 4.5, 9, 22.5, ?

[ :A] 27.3

[ :B] 48

[ :C] 55

[ :D] 67.5

[ :ANS] D

[ :NQ]

[ :Q.5] 2, 3, 7, 16, 32, ?

[ :A] 57

[ :B] 39

[ :C] 56

[ :D] 55

[ :ANS] A

[ :NQ]

[ :Q.6] In this Question three alternatives are alike in a certain way but the rest one is different. Select the odd one.

[ :A] Chalk

[ :B] Pen

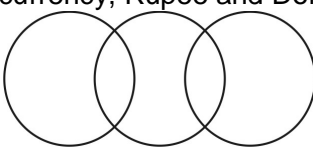
[ :C] Pencil

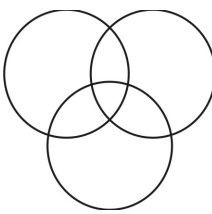
[ :D] Map  
[ :ANS] D


[ :NQ]  
[ :Q.7] In this Question three alternatives are alike in a certain way but the rest one is different.  
Select the odd one.  
[ :A] Taxi  
[ :B] Bus  
[ :C] Car  
[ :D] Tanker  
[ :ANS] D

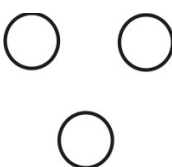
[ :NQ]  
[ :Q.8] In this Question three alternatives are alike in a certain way but the rest one is different.  
Select the odd one.  
[ :A] June  
[ :B] August  
[ :C] April  
[ :D] November  
[ :ANS] B

[ :NQ]  
[ :Q.9] Which one of the following Venn-diagram correctly represents the relation between currency, Rupee and Dollar?

[ :A] 

[ :B] 

[ :C] 

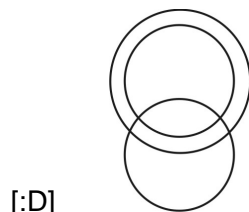
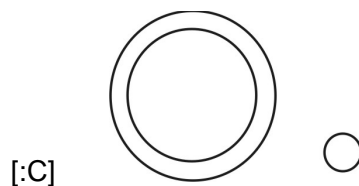
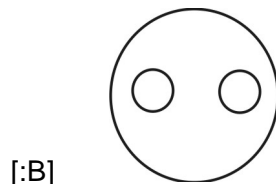
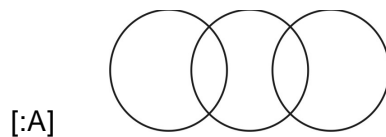
[ :D] 

[ :D]  
[ :ANS] C

[ :NQ]



[Q.10] Which one of the following Venn-diagram represents the relations between Mumbai, Madhya Pradesh and Bhopal?



[ANS] C

[NQ]

[Q.11] In a coded language, ONLINE is written as LNOENI and SILENT is written as LISTEN, then in the same coded language, LISTEN will be written as.

- [A] ILSNET
- [B] SILENT
- [C] SILNET
- [D] SILETN

[ANS] C

[NQ]

[Q.12] If AVOID is coded as 73564 and CHINA is coded as 28617, what will be the code for COVID?

- [A] 53246
- [B] 25364
- [C] 25346
- [D] 25634

[ANS] B

[NQ]

[Q.13] Arrange the following in meaningful sequence :

- (1) Crop                      (2) Root                      (3) Stem                      (4) Seed                      (5) Flowers

[A] 4, 1, 2, 3, 5

[B] 2, 4, 3, 5, 1  
[C] 2, 3, 4, 5, 1  
[D] 4, 2, 3, 5, 1  
[ANS] D

[NQ]

[Q.14] Arrange the following in meaningful sequence :

(1) Rain (2) Cloud (3) Ocean (4) River (5) Monsoon

[A] 5, 2, 1, 4, 3  
[B] 3, 1, 2, 4, 5  
[C] 1, 5, 2, 4, 5  
[D] 2, 5, 1, 4, 3  
[ANS] A

[NQ]

[Q.15] As bird is related to kite, in the same way fish is related to which of the following.

[A] Crow  
[B] Submarine  
[C] Boy  
[D] Thread  
[ANS] B

[END]

[ :NQ]

[ :Q.1] The 2019 C40 World Mayors Summit to be held in which city?

[ :A] Washington

[ :B] Copenhagen

[ :C] New Delhi

[ :D] Berlin

[ :ANS] B

[ :INFO] mp=1,mn=0,type=MCQ

[ :NQ]

[ :Q.2] Green Bonds of USD 100 million has been listed by which bank on India International Exchange Limited's (INX) Global Securities Market Green Platform (GSM)?

[ :A] Dena Bank

[ :B] SBI

[ :C] BoB

[ :D] Yes Bank

[ :ANS] B

[ :NQ]

[ :Q.3] According to W.W. Rostow, the stages of economic growth are:

[ :A] Four

[ :B] Two

[ :C] Five

[ :D] None of These

[ :ANS] C

[ :NQ]

[ :Q.4] Where did the 37th Good and Service Tax (GST) Council Meeting held?

[ :A] Varanasi, Uttar Pradesh

[ :B] Kolkata, West Bengal

[ :C] Panaji, Goa

[ :D] New Delhi, Delhi

[ :ANS] C

[ :NQ]

[ :Q.5] "Design Education Quality Mark" is an initiative launched by which of the following institutes?

[ :A] National Institute Of Design (NID)

[ :B] National Institute Of Fashion Technology

[ :C] International Institute Of Fashion Technology

[ :D] The India Design Council

[ :ANS] D

[ :NQ]

[ :Q.6] Which Insurance Policy is launched to cover the hospitalisation expenses of the COVID-19 patients?

[ :A] LIC Jeevan Saral

[ :B] Jeevan Saral

[ :C] Jeevan Anand

[D] Arogya Sanjeevani Insurance Policy

[ANS] D

[NQ]

[Q.7] What is the equation that helps us organize our thinking about life in the galaxy?

[A] Drake's Equation

[B] Frank's Equation

[C] Tupac's Equation

[D] None of these

[ANS] A

[NQ]

[Q.8] In the Drake Equation what does  $R^*$  stand for?

[A] Rancid meat

[B] Really far away stars

[C] The rate of formation of stars

[D] None of these

[ANS] C

[NQ]

[Q.9] Which plastic cannot be breakable?

[A] Thermo

[B] Thermosetting

[C] Heated

[D] Pasteurized

[ANS] B

[NQ]

[Q.10] What is the chemical name of sulphuric acid?

[A]  $\text{NaCl}$

[B]  $\text{H}_2\text{O}$

[C]  $\text{H}_2\text{SO}_4$

[D] Not the above

[ANS] C

[NQ]

[Q.11] Which of the following is not a synthetic fibre?

[A] Rayon

[B] Nylon

[C] Jute

[D] Polyester

[ANS] C

[NQ]

[Q.12] Vitamin E is important for

[A] Protecting cells

[B] Vital tissues protection

[C] Both A and B

[D] Development of bones

[ANS] C

[ :NQ]

[ :Q.13] A disease Kwashiorkor is caused by the deficiency of

[ :A] vitamins

[ :B] proteins

[ :C] carbohydrates

[ :D] fats

[ :ANS] B

[ :NQ]

[ :Q.14] In which year Napoleon I crowned himself as Emperor of France

[ :A] 1789

[ :B] 1745

[ :C] 1804

[ :D] 1904

[ :ANS] C

[ :NQ]

[ :Q.15] 'Boston Tea Party' protest was associated with the revolution of

[ :A] Canada

[ :B] France

[ :C] America

[ :D] Japan

[ :ANS] C

[ :END]